




Solve each problem.


**Answers**

- 1) Which letter best shows -32?



1. \_\_\_\_\_

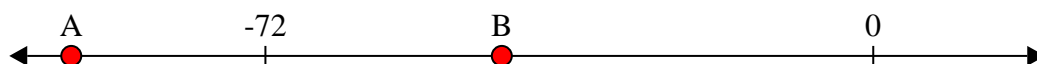
- 2) Which letter best shows -128?



2. \_\_\_\_\_

3. \_\_\_\_\_


- 3) Which letter best shows -44?



4. \_\_\_\_\_

5. \_\_\_\_\_


- 4) Which letter best shows -113?



6. \_\_\_\_\_

7. \_\_\_\_\_


- 5) Which letter best shows -116?



8. \_\_\_\_\_

9. \_\_\_\_\_

- 6) Which letter best shows -20?




10. \_\_\_\_\_


- 7) Which letter best shows -48?



- 8) Which letter best shows -79?



- 9) Which letter best shows -17?



- 10) Which letter best shows -48?

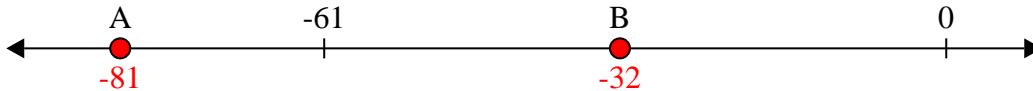




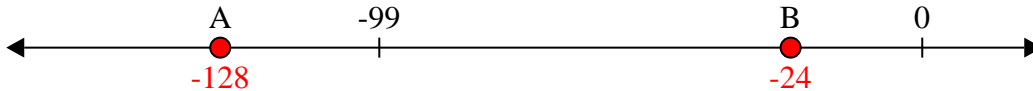
Solve each problem.

**Answers**

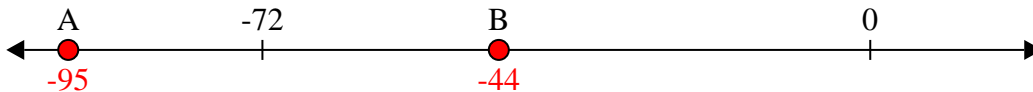
- 1) Which letter best shows -32?

1. **B**

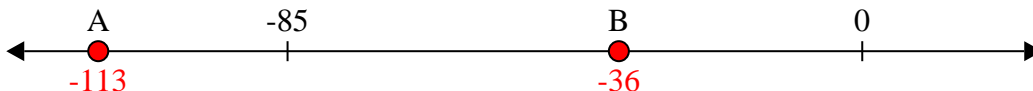
- 2) Which letter best shows -128?

2. **A**


- 3) Which letter best shows -44?

3. **B**


- 4) Which letter best shows -113?

4. **A**

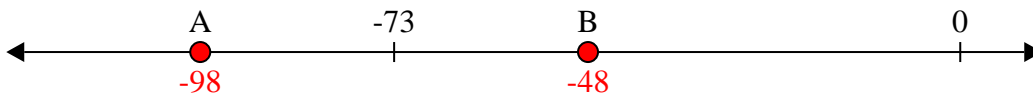
- 5) Which letter best shows -116?

5. **A**


- 6) Which letter best shows -20?

6. **B**


- 7) Which letter best shows -48?

7. **B**

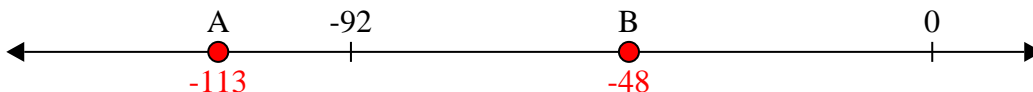
- 8) Which letter best shows -79?

8. **A**

- 9) Which letter best shows -17?

9. **B**

- 10) Which letter best shows -48?

10. **B**